




# AlHuda International School

## Grade III



### SUMMER BREAK HOMEWORK

Subjects	Tasks
English	<p>Note: All the tasks of summer break homework will be done on loose sheets or a separate notebook.</p> <p>Read for ten minutes every day from AIS virtual library by clicking on the following link. <a href="#">PS Virtual Library</a></p> <p>Or you can also read from the book at your home.</p> <p>Handwriting practice of 10-15 sentences daily in neat and eligible handwriting on loose sheets or notebook.</p> <p><b>Task 1</b></p> <ul style="list-style-type: none"><li>• Reading, Comprehension &amp; Hand writing</li></ul> <p>Read the passage from the given link and write the correct answers on the notebook/ loose sheet. You will also select the right answer online to move to the new question.</p> <p><a href="https://www.ixl.com/ela/grade-3/read-about-famous-places">https://www.ixl.com/ela/grade-3/read-about-famous-places</a></p> <p>Visit the weblink and copy the first two paragraphs neatly on the notebook or loose sheet for handwriting practice.</p> <ul style="list-style-type: none"><li>• Writing (Fiction)</li></ul> <p>Use the starter and unveil your imagination</p> <p>A white horse is invited to a candy mountain by two horses. </p> <p>However, there seems to be a hidden danger in the mountain.</p> <p>Write a story about his adventure.</p> <ul style="list-style-type: none"><li>• Grammar and spelling</li></ul> <p>Grammar Practice Quiz : Copy the sentences on the notebook and fill in the blanks with the correct word.</p>

[https://www.proprofs.com/quiz-school/story.php?title=grammar-test\\_11](https://www.proprofs.com/quiz-school/story.php?title=grammar-test_11)

Connectives/Conjunctions Practice:

Copy the sentences on the notebook and fill in the blanks with the correct word.

<https://www.ixl.com/ela/grade-3/use-coordinating-conjunctions>

<https://www.ixl.com/ela/grade-3/use-linking-words-to-complete-a-passage>

Task 2

- Reading, Comprehension & Hand writing:

Read the passage from the given link and write the correct answers on the notebook/ loose sheet. You will also select the right answer online to move to the new question.

<https://www.ixl.com/ela/grade-3/read-about-food>

Copy the first two paragraphs neatly for handwriting practice

- Writing (Nonfiction)

Write a letter to your favorite personality from history. In the letter you may:

- Ask about their routines
- How they became successful
- Talk about your own dreams

- Grammar and spelling

Copy the sentences on the notebooks and write the correct answers by following the instructions.

Use adjectives to compare

[IXL | Use adjectives to compare | 3rd grade language arts](#)

Practice preposition use

<https://www.ixl.com/ela/grade-3/identify-prepositions>

Task 3

- Reading, Comprehension & Hand writing

Read the passage from the given link and write the correct answers on the notebook/ loose sheet. You will also select the right answer online to move to the new question.

<https://www.ixl.com/ela/grade-3/compare-information-from-two-informational-texts>

Copy the first paragraph neatly for handwriting practice

- Writing

Write two paragraphs about a memorable event of your life.

- Grammar and spelling

Noun Quizzes

<https://www.turtlediary.com/quiz/identifying-a-noun-third-grade.html>

Contractions

<https://www.ixl.com/ela/grade-3/contractions-with-not>

<https://www.ixl.com/ela/grade-3/pronoun-verb-contractions>

Task# 4

- Reading, Comprehension & Hand writing

Read the passage from the given link and write the correct answers on the notebook/ loose sheet. You will also select the right answer online to move to the new question.

<https://www.ixl.com/ela/grade-3/read-realistic-fiction-with-illustrations>

Copy the first paragraph neatly for handwriting practice

- Creative Writing

Write a recipe of a cheese sandwich, your instructions should have all the necessary steps from start to finish.

A picture has been added for your ease.

- Grammar and spelling

Copy the sentences on the notebooks and write the correct answers by following the instructions.

Context clues/vocabulary

<https://www.ixl.com/ela/grade-3/use-academic-vocabulary-in-context>

<https://www.ixl.com/ela/grade-3/use-academic-vocabulary-in-context>

Task 5

- Reading, Comprehension & Hand writing

Read the passage from the given link and write the correct answers on the notebook/ loose sheet. You will also select the right answer online to move to the new question.

Copy the first paragraph neatly for handwriting practice

- Creative Writing

Write/Make an information page/poster about one of the following topics:

- Types of volcanoes
- Dangerous sea creatures

Grammar and spelling

Copy the sentences on the notebooks and write the correct answers by following the instructions.

Adverb

<https://www.ixl.com/ela/grade-3/does-the-adverb-tell-you-how-when-or-where>

Adverbial phrase

[https://www.proprofs.com/quiz-school/story.php?title=language-quiz-template\\_1285zc](https://www.proprofs.com/quiz-school/story.php?title=language-quiz-template_1285zc)

Task 6

- Reading, Comprehension & Hand writing

Read the passage from the given link and write the correct answers on the notebook/ loose sheet. You will also select the right answer online to move to the new question.

<https://www.ixl.com/ela/grade-4/read-science-fiction-with-illustrations>

Copy the first paragraph neatly for handwriting practice

- Writing

1. Write an invitation to your friend to come to a hiking event hosted by your family.

2. Write a mnemonic on the following words:

- Onomatopoeia
- Crypt
- Excellent
- Either

- Grammar and spelling

Copy the sentences on the notebooks and write the correct answers by following the instructions.

Verbs

<https://www.ixl.com/ela/grade-3/identify-action-verbs>

Pronouns

<https://www.ixl.com/ela/grade-3/replace-the-noun-with-a-personal-pronoun>

Task 7

- Reading, Comprehension & Hand writing

Read the passage from the given link and write the correct answers on the notebook/ loose sheet. You will also select the right answer online to move to the new question.

<https://worksheetsplus.com/Reading/CrocsGators.html>

Copy the first 4 paragraphs neatly for handwriting practice

- Creative Writing

Keeping in mind the features of a play script, write a two-page script on an adventure a dinosaur has while trying to save his family from a comet.

- Remember to add stage directions in present tense
- Have 3-4 characters and insert a setting in the beginning
- Properly edit your work

Task 8

- Reading, Comprehension & Hand writing

[A Ticket to China - Free Online Reading Comprehension Worksheet and Questions for 2nd and 3rd Grade - on desktop, tablet and mobile phone browsers \(worksheetsplus.com\)](#)

Copy the first 2 paragraphs neatly for handwriting practice

- Creative Writing

Imagine you have gone on vacation to a beautiful island. Write a haiku, describing what the island looks like.

- Grammar and spelling

Copy the sentences on the notebooks and write the correct answers by following the instructions.

Alliteration

<https://www.proprofs.com/quiz-school/story.php?title=alliteration-quiz>

Note: All written tasks to be done on loose sheets/NB

Task 1:

1) Topic: Division

❖ Video

[https://www.youtube.com/watch?v=auqhVhaX\\_Zo](https://www.youtube.com/watch?v=auqhVhaX_Zo)

Online Quiz : Write the correct answer on the loose sheet / notebook as you solve it online.

<https://www.ixl.com/math/grade-3/division-facts-for-2-3-4-5-and-10-true-or-false>

❖ Written task

1 Solve the following

1)  $45 \div 9$

2)  $35 \div 7$

3)  $64 \div 8$

4)  $29 \div 3$

5)  $120 \div 6$

2. Word problems

- i. Joe bought 15 new CDs and arranged them in 5 even stacks. How many CDs did Joe put in each stack?
- ii. A clothing store distributed 20 shirts evenly on 4 racks. How many shirts did the store put on each rack?
- iii. Devin needs 2 peaches to make his famous peach pie. If Devin has 16 peaches, how many peach pies can he make?
- iv. Leslie had 25 red bricks. She arranged the bricks into 5 rows. How many bricks did Leslie put in each row?

Task 2:

Topic: Multiplication

❖ Video

<https://youtu.be/vczu9agvF4g>

Math

Online Quiz : Write the correct answer on the loose sheet / notebook as you solve it online.

<https://www.ixl.com/math/grade-3/multiplication-tables-for-2-3-4-5-and-10>

<https://www.ixl.com/math/grade-3/multiplication-facts-for-2-3-4-5-and-10-true-or-false>

❖ Written task

Q: Solve the following

1)  $135 \times 5$

2)  $45 \times 4$

3)  $97 \times 6$

4)  $826 \times 8$

5)  $98 \times 9$

---

### Task 3

Topic: Equivalent Fractions

❖ Video learning

<https://www.youtube.com/watch?v=8Lp0xrtq0co>

Online Quiz: Write the correct answer on the loose sheet / notebook as you solve it online.

<https://www.mathplayground.com/Triplets/index.html>

❖ Written task

Write next three equivalent fractions of each fraction.

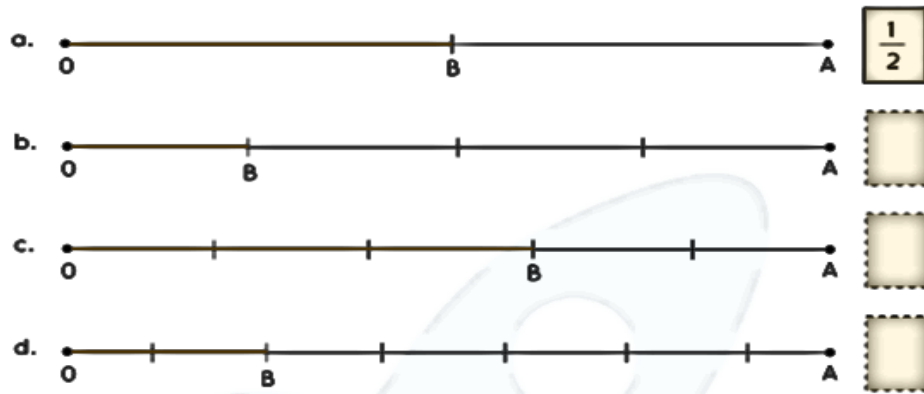
1)  $\frac{2}{4}$

2)  $\frac{5}{6}$

3)  $\frac{7}{8}$

4)  $\frac{3}{4}$

1) Segment OA represents 1 unit. Write the fraction represented by segment OB. One is done for you.



Task 4:

Topic: Adding and subtracting two-digit numbers

❖ Video Watching

[https://www.youtube.com/watch?v=hLttJwoZk\\_0](https://www.youtube.com/watch?v=hLttJwoZk_0)

Online Quiz: Write the correct answer on the loose sheet / notebook as you solve it online.

<https://www.turtlediary.com/quizzes/addition.html>

❖ Written task (word problems)

- i. There are 223 bees in the hive. There are also 42 bees outside exploring. How many bees are there in all?
- ii. Abby has a chest of coins. Inside, there are 499 gold coins and 66 silver coins. How many coins are in the chest?
- iii. Belmont Lake was originally blue because it only had 83 algae plants. Then towns and farms cropped up by the lake. This caused 276 more algae plants to grow, which turned the lake green. How many algae plants are now in Belmont Lake?
- iv. There were a total of 667 books sitting on a bookcase in Fred's bedroom, until he sold 70 of them. How many books are left on the bookcase?



- v. Shelby owns an automobile dealership. Last week, she received a shipment of 27 automobiles. She now has 499 automobiles for sale. How many automobiles did Shelby have before the shipment?

#### Task 4:

Topic: Addition Fractions

❖ Video Watching

[https://www.youtube.com/watch?v=rLCheqJh\\_rQ](https://www.youtube.com/watch?v=rLCheqJh_rQ)

Online Quiz: Write the correct answer on the loose sheet / notebook as you solve it online.

[https://www.abcya.com/games/adding\\_fractions](https://www.abcya.com/games/adding_fractions)

<https://mrnussbaum.com/fractions-adding-fractions-with-like-denominators-online>

❖ Written task

1.  $\frac{1}{2} + \frac{2}{3} = \underline{\hspace{2cm}}$

2.  $\frac{4}{8} + \frac{3}{8} + \text{-----} = 1$

3.  $\frac{5}{7} + \frac{3}{7} = \text{-----}$

4.  $\frac{4}{10} + \frac{5}{10} = \text{-----}$

5.  $\frac{3}{9} + \text{-----} = 1$

#### Task 5

Topic: Handling Data

❖ Video Watching

<https://www.youtube.com/watch?v=hHBJPF9rxYg>

Online Quiz Write the correct answer on the loose sheet / notebook as you solve it online.

<https://www.topmarks.co.uk/carroll-diagrams/2d-shapes>

❖ Written task

- 1) Jamil has 10 toy cars, Sana has 12 toy cars, Laraib has 16 toy cars and Ali has 8 toy cars. Represent the given data as a pictogram and bar chart. ( Key. 1 picture car shows 2 toy cars)
- 2) 7 apples were sold on Monday, 12 on Tuesday, 6 on Wednesday, 9 on Thursday and no apple was sold on Friday. Represent the data with the help of a tally chart .

### Task 6 :

#### Topic: Time and time intervals

##### ❖ Video

<https://www.youtube.com/watch?v=tVpOl5HZtEk>

<https://www.youtube.com/watch?v=nSWX-jLj0RO>

Online Quiz: Write the correct answer on the loose sheet / notebook as you solve it online.

<https://www.ixl.com/math/grade-3/elapsed-time-find-the-end-time>

<https://www.ixl.com/math/grade-3/find-the-elapsed-time>

<https://www.ixl.com/math/grade-3/read-clocks-and-write-times>



##### ❖ Written task

Q1: Convert the time units.

- i. 3,600 sec = \_\_\_\_\_ hr
- ii. 3 hr = \_\_\_\_\_ sec
- iii. 3 hr = \_\_\_\_\_ min
- iv. 330 min = \_\_\_\_\_ hr
- v. 300 sec = \_\_\_\_\_ min
- vi. 6 min = \_\_\_\_\_ sec

Read the train schedule and answer the questions.

Train Schedule	
From City A to City B	From City B to City A
7:30	8:15
8:40	9:30
9:10	10:20
10:50	11:40

1. If the time now is 
- (a) when is the next train departing from City A? \_\_\_\_\_
- (b) when is the next train departing from City B? \_\_\_\_\_
2. If the time now is 
- (a) when is the next train heading to City A? \_\_\_\_\_
- (b) when is the next train heading to City B? \_\_\_\_\_

Task 7:

Topic: Area and perimeter

❖ Video learning

<https://www.youtube.com/watch?v=0ZxOTHlbgRM>

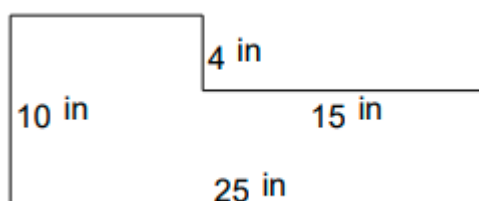

Online Quiz Write the correct answer on the loose sheet / notebook as you solve it online.

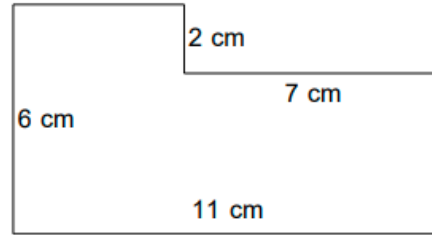
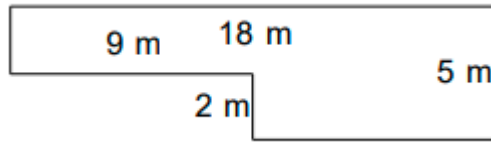
<https://www.ixl.com/math/grade-3/perimeter-of-rectilinear-shapes>

<https://www.ixl.com/math/grade-3/relationship-between-area-and-perimeter-find-the-area>

❖ Written task

Q1: Find perimeter of following shapes.

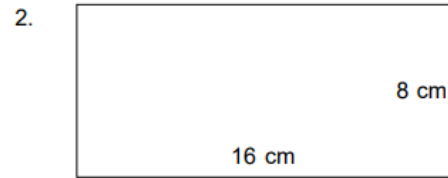




Q2. Find the area of the following shapes.




---




---




---




---

Task 8:

Topic: Collecting and recording data

❖ Online quiz

<https://www.ixl.com/math/grade-3/create-bar-graphs>

<https://www.ixl.com/math/grade-3/graph-points-on-a-coordinate-plane>

<https://www.ixl.com/math/grade-3/interpret-pictographs>

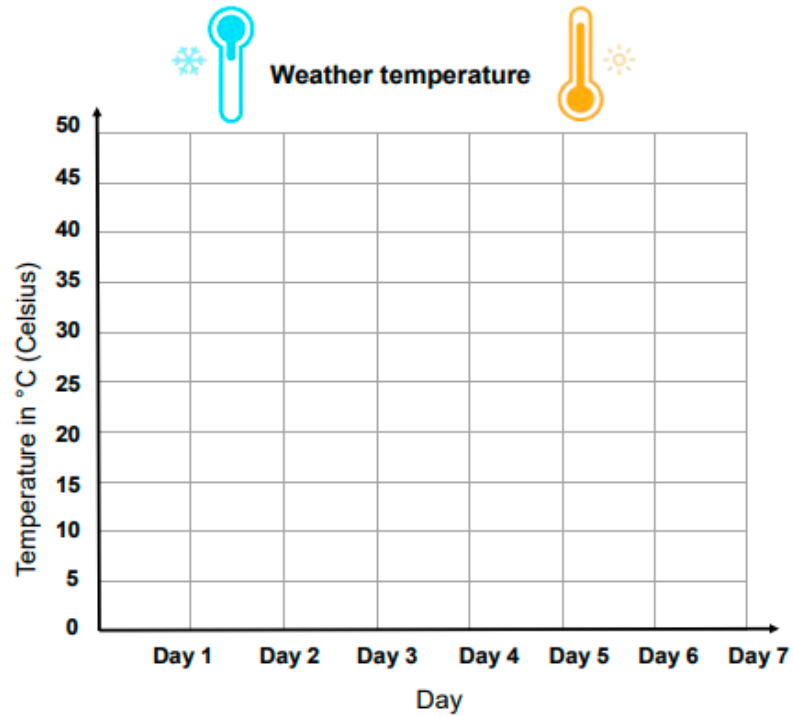
<https://www.ixl.com/math/grade-3/interpret-tally-charts>

❖ Written task

Record the temperature at noon each day for 7 days.

Create a line graph.

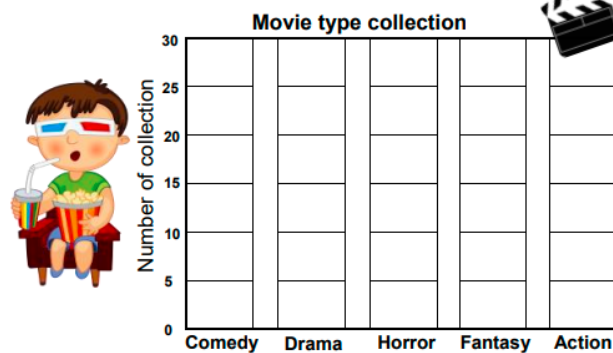
Day	Day 1	Day 2	Day 3	Day 4	Day 5	Day 6	Day 7
Temperature in °C							



Clark counted the different types of movies in his collection.

Read the table, create a bar graph and answer the questions.

Movie type	Comedy	Drama	Horror	Fantasy	Action
Number of	25	5	20	15	10



1. Which movie type does he like the most? \_\_\_\_\_
2. Which movie type does he like the least? \_\_\_\_\_
3. How many more fantasy than drama movies are there? \_\_\_\_\_
4. For how many movie types does Clark have more than 10 movies? \_\_\_\_\_
5. How many comedy and drama movies does he have? \_\_\_\_\_
6. How many movies does he have in total? \_\_\_\_\_

Task 9:

Topic: Place value, comparing and rounding numbers

❖ Video

<https://www.youtube.com/watch?v=XoqYZgBcio0>

[https://www.youtube.com/results?sp=mAEB&search\\_query=place+value+grade+3](https://www.youtube.com/results?sp=mAEB&search_query=place+value+grade+3)

❖ Online quiz

<https://www.ixl.com/math/grade-3/place-value-names-up-to-hundred-thousands>

<https://www.ixl.com/math/grade-3/compare-numbers>

<https://www.ixl.com/math/grade-3/graph-and-compare-fractions-with-like-denominators-on-number-lines>

<https://www.ixl.com/math/grade-3/round-to-the-greatest-place-value>

❖ Written task

Q1: Round to the value of the underlined digit.

1. 2,883 = \_\_\_\_\_ 2. 468 = \_\_\_\_\_ 3. 3,060 = \_\_\_\_\_

4. 9,731 = \_\_\_\_\_ 5. 2,825 = \_\_\_\_\_ 6. 4,757 = \_\_\_\_\_

Q2: Determine the value of the underlined digit.

1. 229 = \_\_\_\_\_ 2. 31 = \_\_\_\_\_

3. 6,819 = \_\_\_\_\_ 4. 211 = \_\_\_\_\_

5. 1,660 = \_\_\_\_\_ 6. 7,817 = \_\_\_\_\_

Q3: Compare the numbers. Add: > or < or =

1. 1,668 \_ 1,717                      2. 5,971 \_ 9,237
3. 3,699 \_ 2,942                      4. 656 \_ 502
5. 5,669 \_ 5,128                      6. 4,966 \_ 3,252

Task 10:  
Topic: 2D and 3D shapes

❖ Video

<https://youtu.be/61lZpLRnXUM>

❖ Online Quiz

<https://www.turtlediary.com/quiz/2-d-and-3-d-shapes.html>

❖ Written task


- 1) Draw a rectangular prism.
- 2) Draw a pentagonal pyramid.
- 3) Draw a hexagon with two right angles.
- 4) Which 2D shape makes up a triangular prism?
- 5) Is the circle a polygon if not explain why?
- 6) Write the vertices, edges and faces of tetrahedron.

روزانہ کسی بھی اردو کی کتاب میں سے ۸-۱۰ سطور کا پیپر خوشخط کریں اور اپنی پسند کی کتاب سے روزانہ ایک پیرا گراف پڑھیں۔ تمام کام ایک کا پی یا شیٹ کے اوپر کریں۔

حصہ پڑھائی:

مندرجہ ذیل کہانی پڑھیں۔

Urdu



ایک لومڑی بھوک کے مارے نڈھال پھر رہی تھی، وہ مایوس ہو کر ایک درخت کے نیچے بیٹھ گئی۔ اُس کی نظر اُوپر پڑی تو اُسے ایک کوّا نظر آیا جس کی چونچ میں پنیر کا ٹکڑا تھا۔ اُس نے دل میں سوچا کہ یہ پنیر کا ٹکڑا مجھے مل جائے۔ لومڑی نے کوّے کو مصروف کرنے کی ایک ترکیب نکالی اور کوّے سے باتیں کرنے لگی۔ وہ بولی، "کوّے میاں تمہارے پر کتنے چمکیلے ہیں اور تمہاری آواز کتنی سُریلی ہے۔ مجھے اچھا سا گیت تو سُناؤ۔ کوّا اپنی تعریف سُن کر بہت خوش ہوا اور کانیں کانیں کرنے لگا۔ جو نہی اُس نے چونچ کھولی پنیر کا ٹکڑا نیچے گرا۔ لومڑی نے جھٹ اُسے اٹھایا اور چٹ کر گئی۔

حصہ تخلیقی لکھائی:



پاکستان کے ہمسایہ ممالک کے بارے میں تو آپ جانتے ہی ہوں گے۔ چین ہمارا ہمسایہ ملک ہے۔

چین کے بارے میں آپ کیا جانتے ہیں؟

والدین کی مدد سے انٹرنیٹ سے معلومات حاصل کریں اور چین کے بارے میں ایک معلوماتی مضمون لکھیے، جس میں آپ چین کے دار الحکومت، زبان، مشہور شہروں، کھانوں، لباس اور کھیلوں کے بارے میں معلومات اور تصاویر شامل کر سکتے ہیں۔

لفظی اور ہندسی گنتی اسے ۱۰ تک لکھیں۔

حصہ گرائمر:

اسم تحریر کریں۔

آپ اکثر پارک تو جاتے ہی ہوں گے، پارک میں موجود کوئی سے چھ اسم تحریر کریں۔





گھاس

### حصہ خوشحالی:

مندرجہ ذیل پیرا گراف کو ایک بار خوشخط لکھیں۔

درخت، پودے، بیلے اور سبزہ ہمارے ماحول کو خوبصورت بناتے ہیں۔ ان سے ہمیں پھل، پھول اور سبزیاں ملتی ہیں۔ اونچے، لمبے اور گھنے درخت ہمیں دھوپ سے بچاتے اور سایہ دیتے ہیں۔ پرندے اپنے گھونسلے بھی درختوں پر بناتے ہیں۔ درختوں کی جڑوں میں بہت سے کیڑے مکوڑوں کے گھر اور بل ہوتے ہیں۔ ہمیں چاہئے کہ ہم زیادہ سے زیادہ درخت اور پودے لگائیں۔ یہ ہمارے ماحول اور صحت کے لئے بہت مفید ہیں۔ ہمیں ان کی ضرورت ہے۔

### Week 2

#### حصہ پڑھائی:

درسی کتاب ۳ سے نظم "ہم نے دیکھا ایک روبوٹ" صفحہ نمبر ۱۲۰ کی پڑھائی کریں۔

#### حصہ تخلیقی لکھائی:

درج ذیل تصویر کے بارے میں کم از کم سات جملے تحریر کریں۔



لفظی اور ہندسی گنتی ۲۰ سے ۳۰ تک لکھیں۔

حصہ گرائمر:

اپنے خاندان کے تمام رشتوں کو مذکر اور مونث کے دو کالم بنا کر ان میں تحریر کریں۔

حصہ خوشخطی:

امتواتر اور مسلسل محنت سے آپ کامیابی حاصل کر سکتے ہیں۔  
درج بالا جملے کو دس مرتبہ خوشخط لکھیں۔

**Week 3**

حصہ پڑھائی:

سبق "مری کی سیر" (صفحہ نمبر ۱۲۶) کی پڑھائی کریں۔

حصہ تخلیقی لکھائی:



آپ گرمیوں کی چھٹیوں میں سیر کو تو جاتے ہوں گے، اپنی سیر کا احوال تحریر کریں۔ تخلیقی لکھائی لکھتے ہوئے پانچ اسم معرفہ بھی شامل کریں۔

لفظی اور ہندسی گنتی ۳۰ سے ۴۰ تک لکھیں۔

حصہ خوشخطی:

مندرجہ ذیل الفاظ کو دس بار خوشخط لکھیں۔

جھیل۔ برساتی۔ باشندہ۔ بھاگا۔ سنجوسی

## Week 4

### حصہ پڑھائی:

درسی کتاب ۳ سے نظم "بچے کی دُعا" صفحہ نمبر ۱۵۱ کی پڑھائی کریں۔

### حصہ تخلیقی لکھائی:

لفظی اور ہندسی گنتی ۴۰ سے ۵۰ تک لکھیں۔

اپنے دوست کے نام خط تحریر کریں جس میں اُسے پاکستان کے شمالی علاقہ جات کے بارے میں بتائیں۔



### حصہ گرامر:

اس کمرے میں موجود کوئی سی آٹھ چیزوں کے نام لکھیں اور پھر اُن کے جمع لکھیں۔



میز

### حصہ خوشخطی:

مندرجہ ذیل الفاظ کو پانچ بار خوشخط لکھیں۔

Reading القراءة:

Read the following stories with the help of the given link.

<https://3asafeer.com/>



• Hadith

Learn the following Hadith with translation. And get ready for the Hadith competition after summer vacations.

۱- قال رسول الله صلى الله عليه وسلم: " إن الله لا ينظر إلى أجسامكم ، ولا إلى صوركم، ولكن ينظر إلى قلوبكم وأعمالكم" ((رواه مسلم))

۲- قال رسول الله صلى الله عليه وسلم: " كلمتان خفيفتان على اللسان، ثقيلتان في الميزان، حبيبتان إلى الرحمن: سبحان الله وبحمده، سبحان الله العظيم" ((متفق عليه))

۳- عن عمر بن أبي سلمة رضى الله عنهما قال: قال لي رسول الله صلى الله عليه وسلم: "سم الله وكل بيمينك، وكل مما يليك". ((متفق عليه))

• Revise the concept of singular and dual noun with the help of this video and write 5 singular and 5 dual nouns.

(112) Learn singular, dual and plural in Arabic for kids – تعلم المفرد والمثنى – YouTube - للأطفال

• Sentence Making: Use the given words in sentences.

سَيَّارَتَانِ	هُوَ	مُجْتَهِدٌ	ذَكِيٌّ	طَالِبٌ
two cars	he	hardworking	intelligent	Student
هُنَّ	هُمْ	أَنْتَ	أَنَا	مَسْجِدٌ
They (female)	they (male)	You	I	mosque
هَؤُلَاءِ	مَفْتُوحَةٌ	ذَهَبَ	قَلَمَانِ	أُولَئِكَ
these	open	he went	two pens	those

Arabic

- Choose any 5 words from each lesson of the book (Ref. Madinah Arabic Reader 2) and make a booklet of a pictorial dictionary.
- Write 10 singular and plural from the book Madinah Arabic Reader2 and make their sentences. (Ref:pg.50)

• Comprehension:

1-Watch the video carefully then write the answers to the given questions.

<https://youtu.be/P5GzGiMzlnA>

مَنْ حَامِدٌ؟

مَنْ هُوَ طَالِبٌ مُجْتَهِدٌ؟

مَاذَا قَالَ يُوسُفُ؟

مَا مَعْنَى: هَذَا فَلَمْ أَصْفُرْ؟

مَا مَعْنَى: هَذَا أُرْزِقُ؟

2-Watch the story and discuss the moral of the story with your parents. Also write the answers of the following questions.

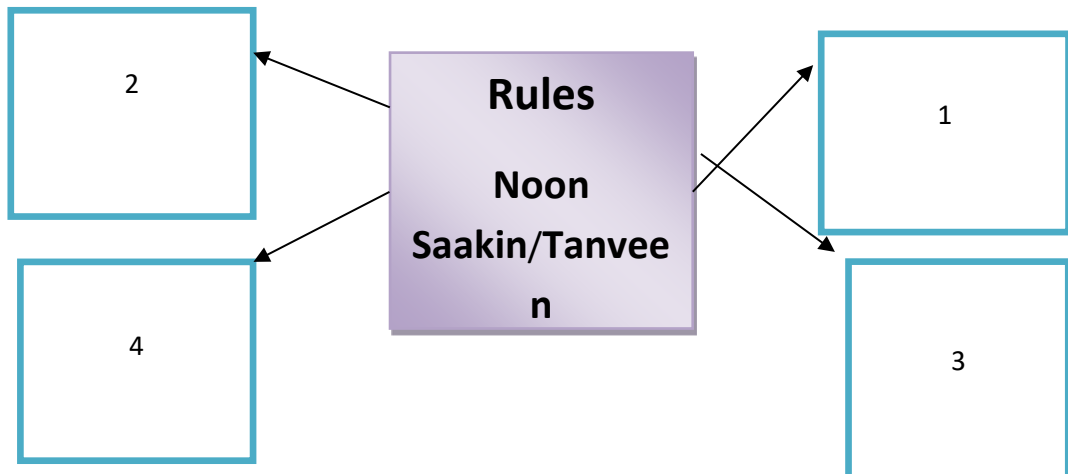
<https://www.youtube.com/watch?v=DHBWQdhJtqk>

- What is the meaning of the كَنْزُ
  - Write the names of any 4 characters of the story in Arabic.
  - Write the names of the birds in Arabic that helped Peter.
  - What was the greatest treasure - أعظم كَنْزٍ -
- Complete the table of Singular, dual and plural nouns by choosing the word given below. Do this activity on the loose sheet or homework journal.

**TASK 1:**

Write down the names for Rules of Noon Saakin/Tanveen.

Quran  
Recitation



Task 2:

Match the column with correct meaning

Word	Meaning
Idghaam	To clear
Izhaar	To change
Iqlaab	To hide
Ikhfa	To merge

Task 3:

(1) How many letters are there for the ruling of Idghaam?

1-(4)

2-(6)

3-(5)

(2) Letter BA is an Ikhfa letter ?

1-(yes)

2-(no)

(3): Choose the correct option for Izhaar Letters.?

1- (lips letter)

2- (throat letters)

3- (tongue letters)

Task 4:

From the words given below, select the correct options and write in the box.

وَيْلٌ يَوْمَئِذٍ

نُظْفَةٌ أَمْشَاجٍ

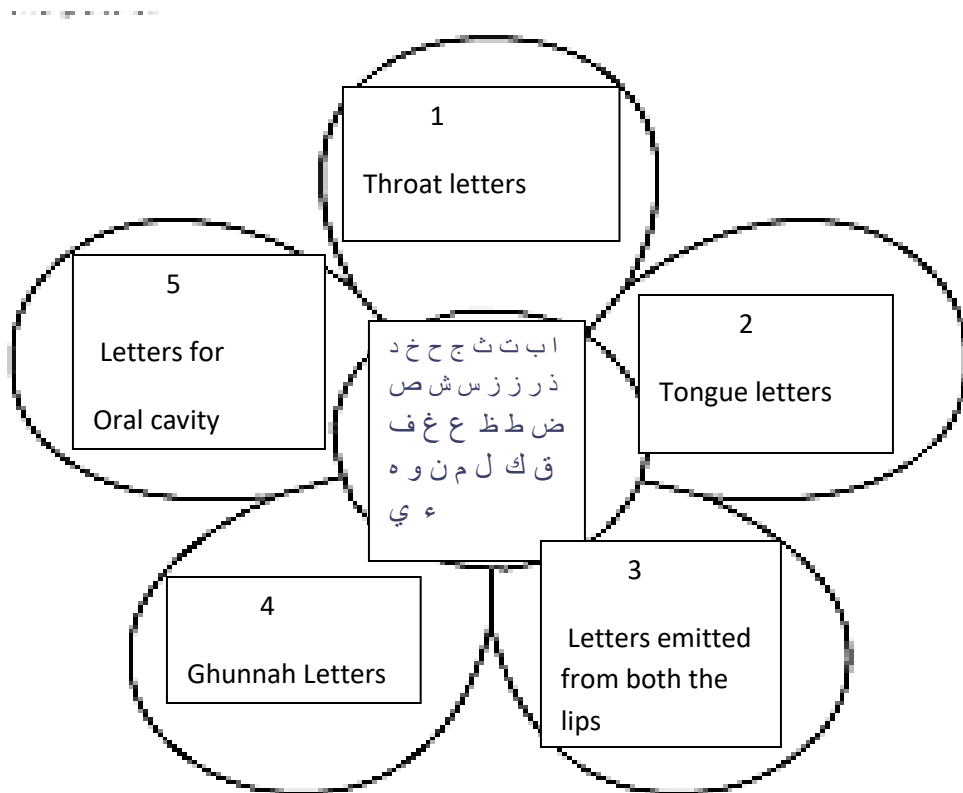
سَمِيعًا بَصِيرًا

وَمَا كَانَ

Izhaar	
Idghaam	
Iqlaab	
Ikhfa	

Task 5:

Write down the Makharij-ul-Huroof on the Petals of the flower.



Task 6

### Project 1

Make 5 book marks of supplication for healing and distribute them to the sick family members.

### PROJECT 2

Recite one page daily from the Naazrah book 3 pages 19-93. Mark your daily recitation task in your Tajweed homework diary.


### PROJECT 3

Make a booklet of rules of Noon Saakin and Tanveen with Explanations and examples.

#### PROJECT 4

Make a canvas for your room with beautiful calligraphy art of

بِسْمِ اللَّهِ الرَّحْمَنِ الرَّحِيمِ



#### NOTE:

Please save all the record of your tasks as student portfolio containing the pictures, audios or videos of the activities in a flash drive.

As prophet Muhammad ﷺ said:

Verily the one who recites the Quran beautifully, smoothly and precisely, he will be in the company of the noble and obedient angels. And as for the difficulty, stammering through its verses, then he will have twice that reward.